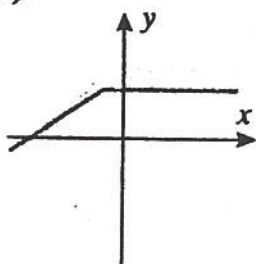
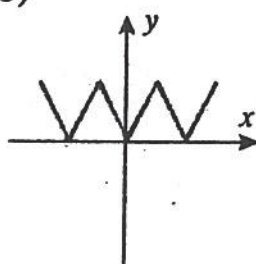


Match the graphs of the functions shown in (a)–(f) with the graphs of their derivatives in (A)–(F).

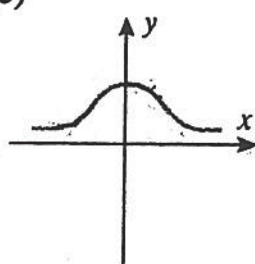
(a)



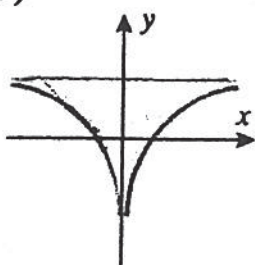
(b)



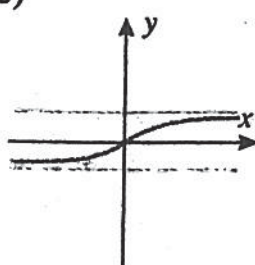
(c)



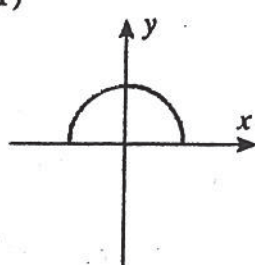
(d)



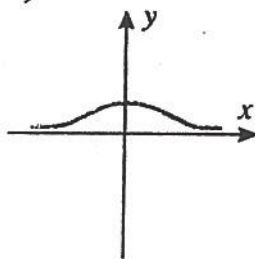
(e)



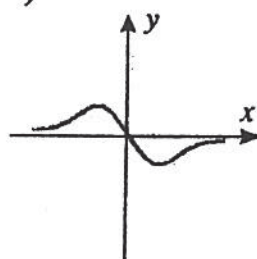
(f)



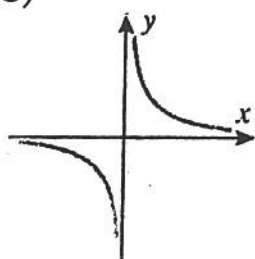
(A)



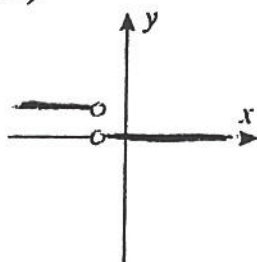
(B)



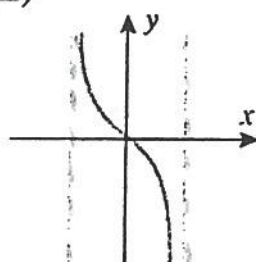
(C)



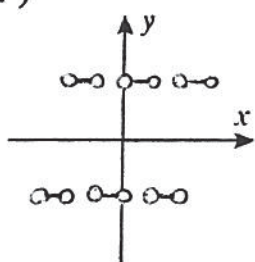
(D)



(E)



(F)



MATCHING QUESTIONS ON GRAPHS OF DERIVATIVES

Each of the Figures (1)-(5) is the graph of the derivative of one of the functions graphed in Figures (a)-(e). Match each function with its derivative.

